

Free Download

Math

Sentence Frames

Let's Keep in Touch!

Newsletter


Facebook

Google +


Pinterest

Selma Dawani


Learning Fundamentals & Educational Therapy



The number has ____ tens and ____ ones.



The number has a _____ and a _____.



You can make this number by adding

_____ and _____.

$$\underline{\hspace{2cm}} + \underline{\hspace{2cm}} = \underline{\hspace{2cm}}$$

45

27

89

36

72

50

48

10

5

93

66

11